

たしざんやってみよう

① $1 + 3 =$

② $4 + 1 =$

③ $3 + 6 =$

④ $1 + 5 =$

⑤ $8 + 2 =$

⑥ $2 + 4 =$


⑦ $5 + 3 =$

⑧ $7 + 2 =$

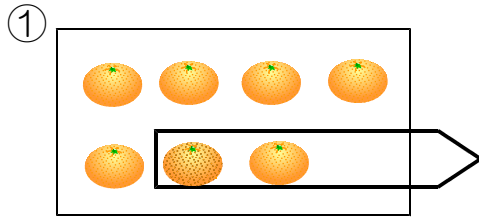
⑨ $4 + 6 =$

⑩ $4 + 4 =$

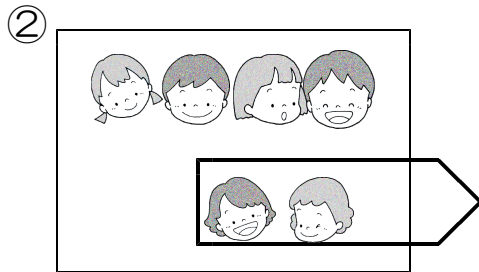
おわったらみなおしをしよう。




のこりはいくつでしょう



のこりは こ




ふたりかえると にん



3こたべると

$$\square - \square = \square$$

こ



2わとんでいくと

$$\square - \square = \square$$

ひき

ひきざんやってみよう

① $6 - 1 =$

② $7 - 4 =$

③ $3 - 2 =$

④ $8 - 4 =$

⑤ $10 - 5 =$

⑥ $9 - 5 =$

⑦ $8 - 1 =$

⑧ $9 - 8 =$

⑨ $6 - 2 =$

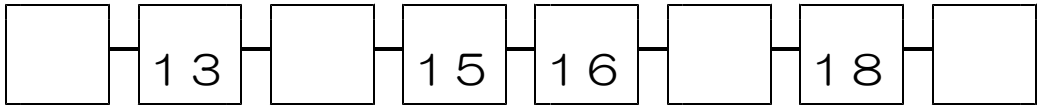
⑩ $10 - 8 =$



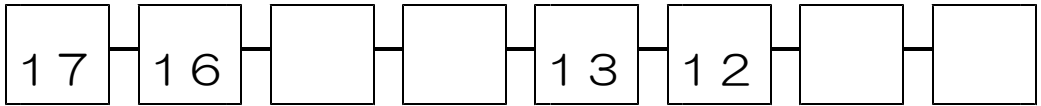
おちついて
けいさんしよう。

□にかぎをいれてみよう

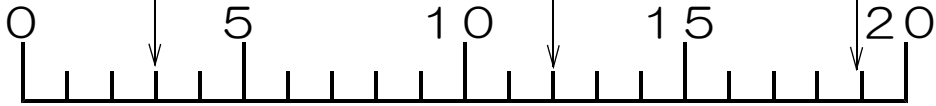
①



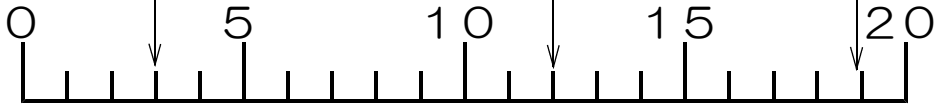
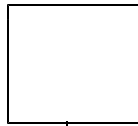
②



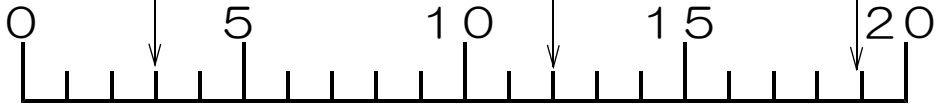

③



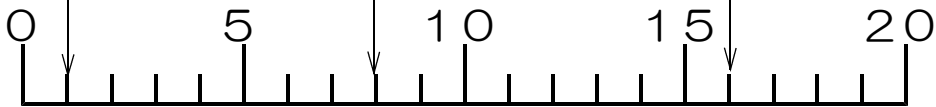
④



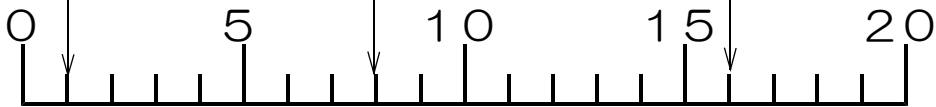
⑤



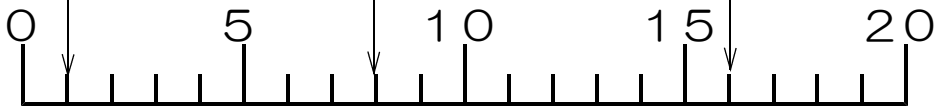
⑥



⑦



⑧



やってみよう

① $10 + 5 =$

② $10 + 9 =$

③ $17 + 1 =$

④ $13 + 4 =$

⑤ $12 + 3 =$

⑥ $11 + 5 =$

⑦ $18 - 2 =$

⑧ $14 - 1 =$

⑨ $19 - 7 =$

⑩ $17 - 5 =$